





Ways We Get Around



Ways We Get Around

Directions:

1. Cut out the pictures.
2. Graph (sort) the pictures.
3. Which one has the most? (Answer: car).
4. Which one has the least? (Answer: train, bicycle).
5. Which ones have the same? (Answer: train, bicycle).
6. Which one has 2 less than cars? (Answer: buses).
7. Which one has 2 more than buses? (Answer: cars).

